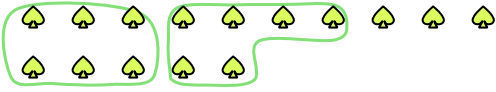




Use the shapes provided to answer the questions.

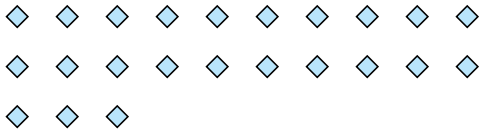
- Ex) There are 15 shapes below. How many groups of 6 can you make with them? How many will you have left over?



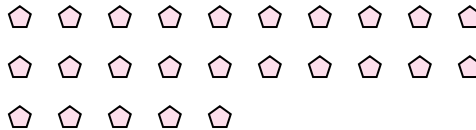
- 1) There are 26 shapes below. How many groups of 7 can you make with them? How many will you have left over?




- 2) There are 23 shapes below. How many groups of 7 can you make with them? How many will you have left over?




- 3) There are 25 shapes below. How many groups of 9 can you make with them? How many will you have left over?



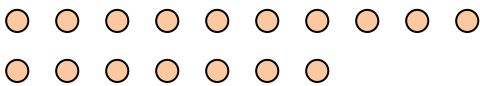
- 4) There are 26 shapes below. How many groups of 4 can you make with them? How many will you have left over?



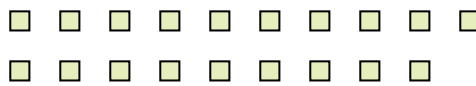
- 5) There are 28 shapes below. How many groups of 2 can you make with them? How many will you have left over?



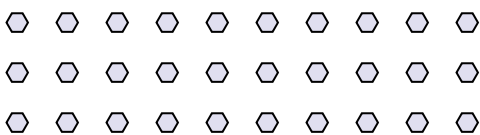
- 6) There are 17 shapes below. How many groups of 9 can you make with them? How many will you have left over?



- 7) There are 19 shapes below. How many groups of 6 can you make with them? How many will you have left over?



- 8) There are 30 shapes below. How many groups of 7 can you make with them? How many will you have left over?



- 9) There are 16 shapes below. How many groups of 4 can you make with them? How many will you have left over?

**Answers**Ex. 2Ex. 3

1. _____

1. _____

2. _____

2. _____

3. _____

3. _____

4. _____

4. _____

5. _____

5. _____

6. _____

6. _____

7. _____

7. _____

8. _____

8. _____

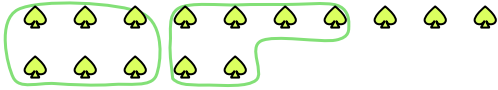
9. _____

9. _____



Use the shapes provided to answer the questions.

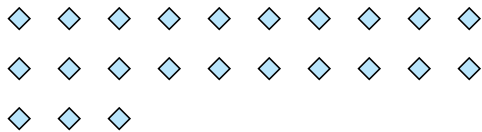
- Ex) There are 15 shapes below. How many groups of 6 can you make with them? How many will you have left over?



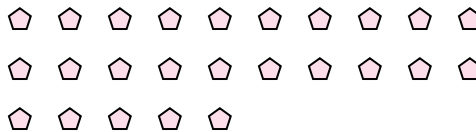
- 1) There are 26 shapes below. How many groups of 7 can you make with them? How many will you have left over?




- 2) There are 23 shapes below. How many groups of 7 can you make with them? How many will you have left over?




- 3) There are 25 shapes below. How many groups of 9 can you make with them? How many will you have left over?



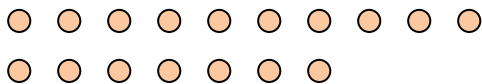
- 4) There are 26 shapes below. How many groups of 4 can you make with them? How many will you have left over?



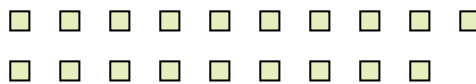
- 5) There are 28 shapes below. How many groups of 2 can you make with them? How many will you have left over?



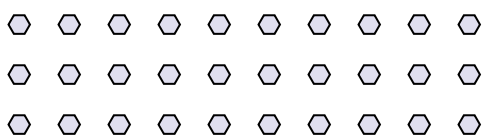
- 6) There are 17 shapes below. How many groups of 9 can you make with them? How many will you have left over?



- 7) There are 19 shapes below. How many groups of 6 can you make with them? How many will you have left over?



- 8) There are 30 shapes below. How many groups of 7 can you make with them? How many will you have left over?



- 9) There are 16 shapes below. How many groups of 4 can you make with them? How many will you have left over?

**Answers**Ex. 2Ex. 31. 31. 52. 32. 23. 23. 74. 64. 25. 145. 06. 16. 87. 37. 18. 48. 29. 49. 0